
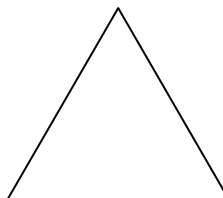





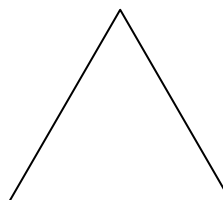

Come vedi gli oggetti dall'alto

Rispondi alle domande apponendo ogni volta una crocetta sull'elemento scelto


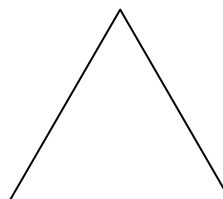
Di che forma è il pavimento dell'aula?




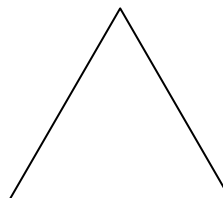

A quale forma corrisponde un albero se lo si osserva dall'alto?



Ed il tetto di una casa?



A che figura assomiglia il ripiano del banco?



Ed il cestino?

